

# La América Central



# La América Central



**Guatemala**

**1**

**2**

**Belice**

La capital de Guatemala es Guatemala.

La capital de Belice es Belmopán.

**Honduras**

**4**

La capital de Honduras es Tegucigalpa.

**El Salvador**

**3**

La capital de El Salvador es San Salvador.

**Nicaragua**

**5**

La capital de Nicaragua es Managua.

**Costa Rica**

**6**

La capital de Costa Rica es San José.

**Panamá**

**7**

La capital de Panamá es Panamá.




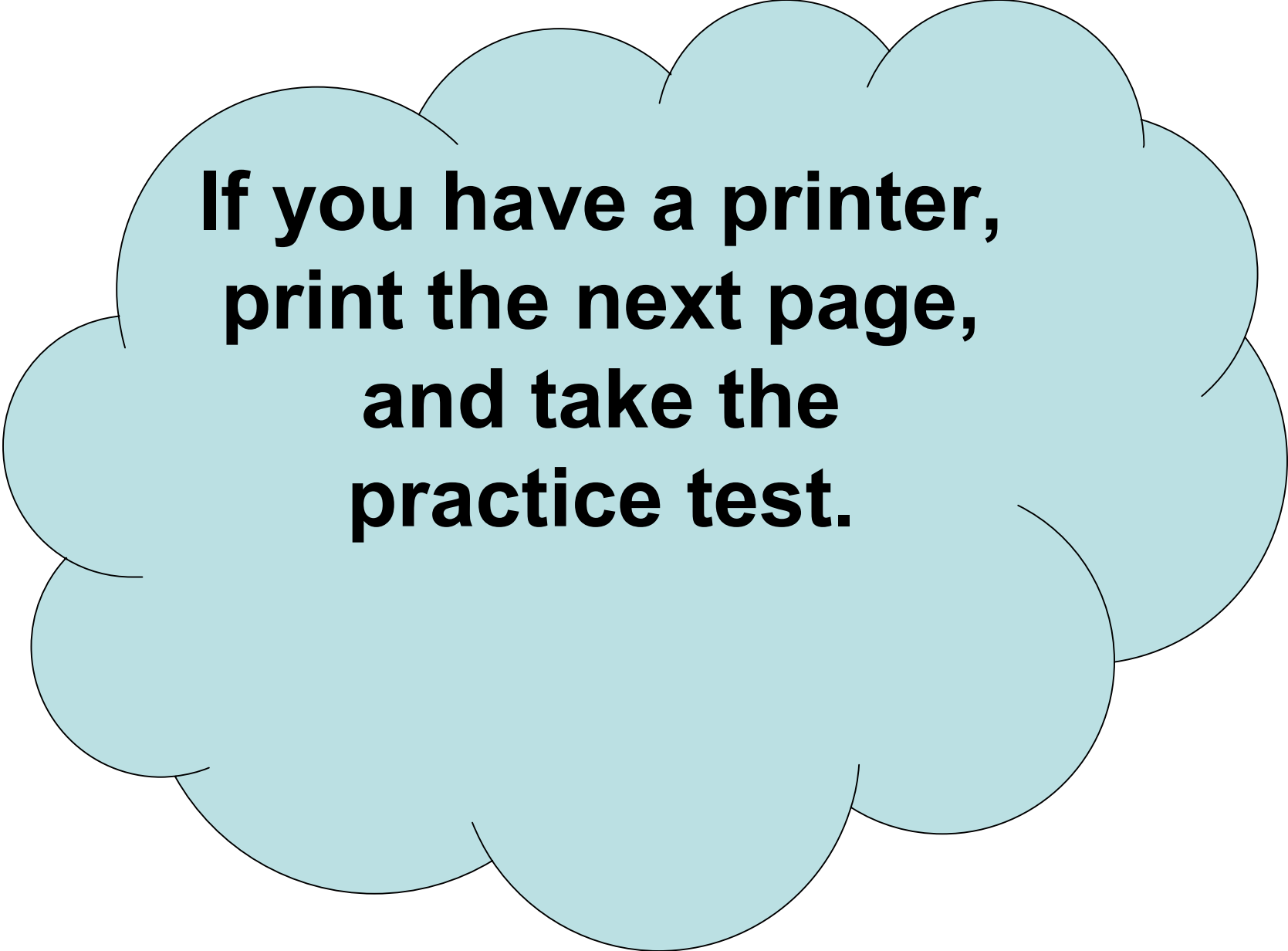
List the countries and each's respective capital city in the order that they appear on the map of Central and North America. *One is part of another and some are not drawn to scale.*

- 1<sup>st</sup> Tegucigalpa, Honduras
- 2<sup>nd</sup> San Salvador, El Salvador
- 3<sup>rd</sup> Austin, Texas
- 7<sup>th</sup> Panamá, Panamá
- 9<sup>th</sup> México D.F., México


- 4<sup>th</sup> Belmopán, Belice
- 5<sup>th</sup> El Continente de la América del Norte
- 6<sup>th</sup> San José, Costa Rica
- 8<sup>th</sup> Guatemala, Guatemala
- 10<sup>th</sup> Managua, Nicaragua

¿Cuál es el nombre oficial de México? Los Estados Unidos Mexicanos





**If you have a printer,  
print the next page,  
and take the  
practice test.**





List the countries and each's respective capital city in the order that they appear on the map of Central and North America. *One is part of another and they are not drawn to scale.*

1st \_\_\_\_\_

4th \_\_\_\_\_

2nd \_\_\_\_\_

5th \_\_\_\_\_

3rd \_\_\_\_\_

6th \_\_\_\_\_

7th \_\_\_\_\_

8th \_\_\_\_\_

9th \_\_\_\_\_

10th \_\_\_\_\_

¿Cómo te llamas? \_\_\_\_\_